





Primary 1

Singapore National Day Worksheet

For the answer key, go to blog.sparkedu.com/singapore-national-day-worshets



- 1 Abby is showing the age of Singapore with cubes. How old is Singapore this year?



There are:

tens ones

= +

= cubes

Therefore, Singapore is years old this year!

Happy birthday, Singapore!


- 2 Benny wants to buy a pizza. Circle the correct amount of money for it.





\$10.5



- 3 The National Day Parade starts at half-past five. Draw the time on the clock face.













4 Look at the cards and count the stars. Then answer questions.



- (a) There are _____ stars on the first card
- (b) There are _____ stars on the fifth card.
- (c) The _____ card has only four stars.
- (d) The _____ card and the _____ card have the same numbers of stars.

5 This picture graph shows the favorite NDP activities of some students..

Our favourite NDP activities		
 Firework displays		
 Aircraft displays		
 Booth games		
 Stage performances		

Each 😊 stands for 1 student.

- (a) There are _____ types of NDP activities.
- (b) _____ students like firework displays the most.
- (c) The students like _____ the least.
- (d) _____ more students like firework displays than booth games.
- (d) There are _____ students taking part in this survey.

Success Beyond Just Math

Nurture problem-solving and critical thinking skills for lifelong success.

