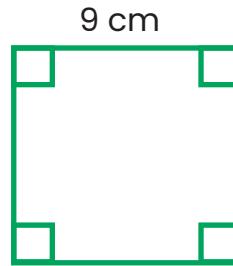





5 What is the perimeter of the square?


- (1) 14 cm (2) 27 cm
(3) 18 cm (4) 36 cm



6 Benny is reading up on the travel duration of two flights. Fill in the boxes for him.

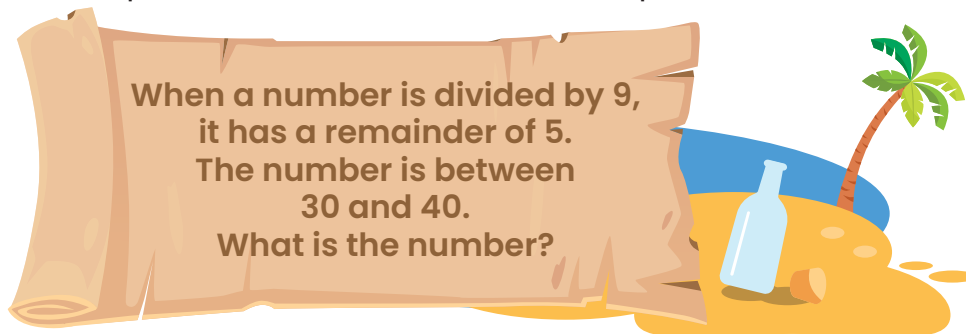
(a) Singapore (SIN)  Bali (DPS)

3 h = _____ min.

(b) Singapore (SIN)  Hong Kong (HKG)

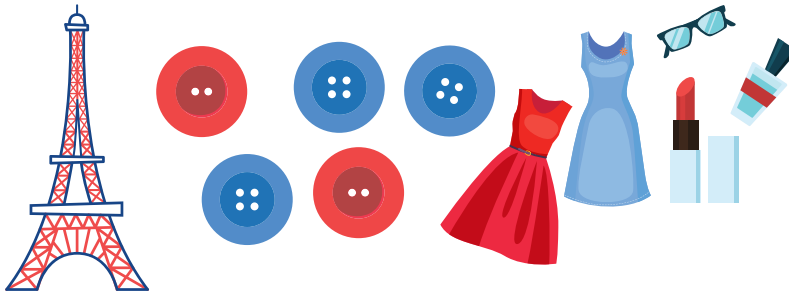
240 min = _____ h.

7 Casey found a special note in a bottle washed up on the beach.




Solve the riddle for Casey.

8 Abby is at the Paris Fashion Week. A box has 249 red buttons. There are 8 times as many blue buttons as red buttons. What is the total number of red and blue buttons in the box altogether?



Scan for a free trial class!



Success Beyond Just Math

Nurture problem-solving and critical thinking skills for lifelong success.