




# 2nd Grade Thanksgiving Worksheet



For the answer key, go to  
[blog.sparkedu.com/thanksgiving-worksheets](http://blog.sparkedu.com/thanksgiving-worksheets)

**1** Compare 286 and 268.

Hundreds	Tens	Ones
2	8	6

Hundreds	Tens	Ones
2	6	8

is smaller than .

**2** Which one of the following subtraction sentences will give the smallest answer?

1)  $484 - 246$

3)  $774 - 526$

2)  $520 - 278$

4)  $968 - 729$

**3** Shade the box with the smallest value.

$4 \times 4$

$8 \times 3$

$12 \div 3$

$30 \div 5$

**4** Match the information on the left with the correct equation on the right.

ten 2s

$30 \div 5$

$2 + 3$

$16 - 9$


$10 + 10$




5  $1 - \underline{\hspace{2cm}} = \frac{9}{11} ?$

- 1)  $\frac{2}{11}$
- 2) 2
- 3)  $\frac{2}{9}$
- 4)  $\frac{11}{2}$

6 Mrs. Lee took 2 hours to cook Thanksgiving dinner. Dinner was ready at 7 PM. She started cooking at                     .

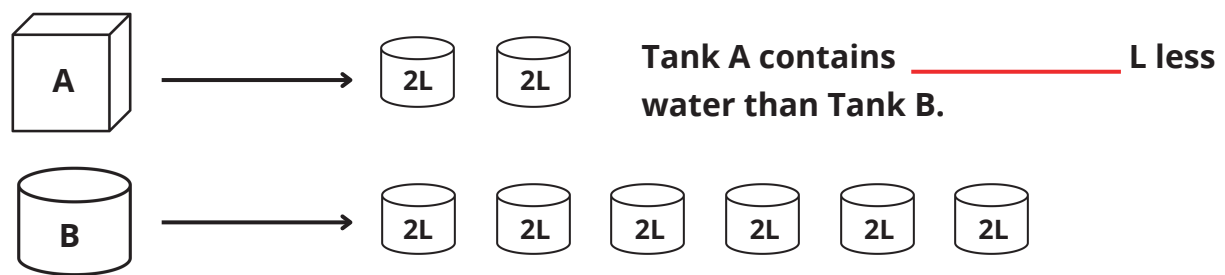


Started cooking



Finished cooking

7 Abby used all the water in Tank A to fill some containers. Then, she used all the water in Tank B to fill some similar containers as shown below.



8 If 30 pumpkin pies were sold altogether, what does one stand for?

Monday	Tuesday	Wednesday	Thursday	Friday

Answer:                     

## Success Beyond Just Math

Nurture problem-solving and critical-thinking skills for lifelong success.

Try a FREE class

Fun, effective math. Scan for your FREE trial class!