





Primary 1


Around the World Worksheet

For the answer key, go to blog.sparkedu.com/around-the-world-worksheets-sg



1 Count and write the numbers.

(a) 

(b) 


2 The chocolate bar has 9 smaller pieces.
How can the 9 pieces be shared between Casey and Abby?


2 and make 9



 and 4 make 9

3 Fill in each blank with the correct answer.

$58 - 7 = \underline{\hspace{2cm}}$



4 Fill in each blank with the correct answer.



$6 + 6 + 6 + 6 + 6 = \underline{\hspace{2cm}}$

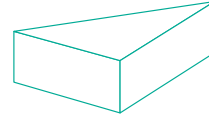
5 sixes =



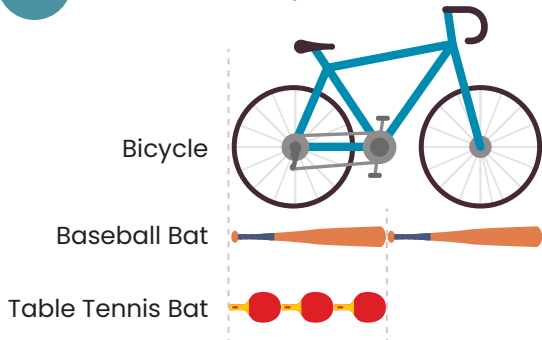


- 5 What is 2 tens less than 59?
 (1) 39 (2) 61 (3) 57 (4) 79


- 6 Benny is building some blocks at the Science Museum. The faces of the solid below are made up of 2 different shapes. What are the two shapes?





















- 7 Look at the pictures and fill in the blanks.



(a) A baseball bat is about _____  long.

(b) A bicycle is about _____  long.

- 8 The picture graph shows the number of pizzas made by 4 children at the Pizza Museum. Which 2 girls made 10 pizzas altogether?

Anna	  
Belle	   
Cindy	     
Dannie	    

Each  stands for 1 pizza.

Scan for a free trial class!

