




Spark Math

Kindergarten 2

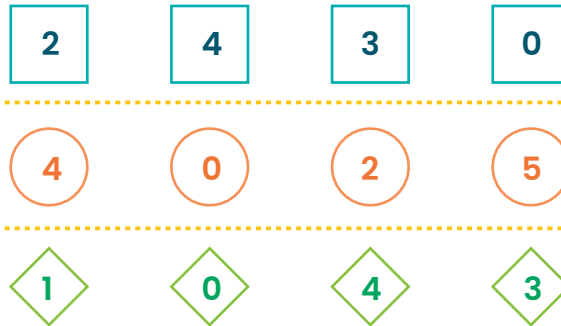
Around the World Worksheet



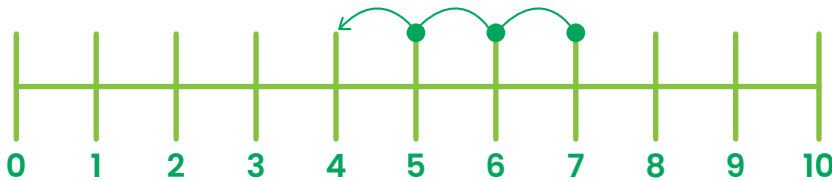
1 Complete the number bond.



2 In each row, colour the two numbers that make 5.



3 Count back.
Write the correct answers.

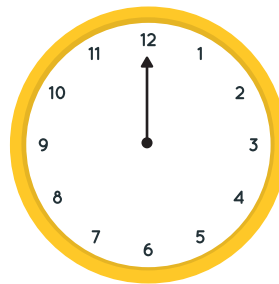


3 less than 7 is _____.

$7 - 3 =$ _____.

4 Read the time.
Draw the missing hour hand on the clock


1 o'clock





5

Fill in the blank.



The ice cream is about _____ tall.


6

Colour all the triangles green.



7

Benny has 9 big seashells and 8 small seashells. How many seashells does Benny have altogether?



Benny has _____ seashells altogether.

8

Complete the subtraction sums.

$$15 - 3 = [\quad]$$

$$20 - 6 = [\quad]$$

Success Beyond Just Math

Nurture problem-solving and critical thinking skills for lifelong success.

For the answer key, go to <https://blog.sparkedu.com/around-the-world-worksheets-sg/>

scan for a free trial class!

