




1 How many are there?



Tens	Ones
<input type="text"/>	<input type="text"/>

$$\square + \square = \square$$

There are .

2 Compare the numbers.

(a) Compare 59 and 71

Tens	Ones	Tens	Ones
5	9	7	1

is greater than .

(b) Compare 85 and 87

Tens	Ones	Tens	Ones
8	5	8	7

is greater than .

3 What is the missing sign in the box?

$$7 \times 5 = 5 \times 5 \square 2 \times 5$$

(1) +

(2) -

(3) ×

(4) ÷

4 Which two cards below have the same value?

$$12 \div 4$$

A

4 groups
of 3

B

$$2 \times 3$$

C

4 threes

D

(1) B and D

(2) B and C

(3) A and C

(4) A and D



5 Which of the following has a value smaller than 5?

(1) $14 \div 2$

(2) $20 \div 5$

(3) $24 \div 4$

(4) $30 \div 3$


6 Look at the picture below. The pumpkin weighs 300 g. What is the mass of the apple?

(1) 106 g

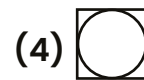
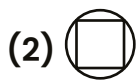
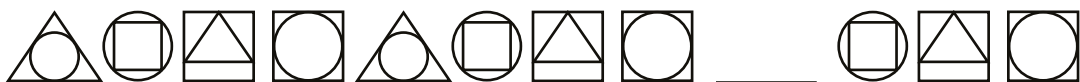
(2) 160 g

(3) 406 g

(4) 460 g



7 Study the pattern below. What is the missing shape?



8 What is the amount of money shown below?



(1) \$2.70

(2) \$2.80

(3) \$3.20

(4) \$3.50

Scan for a free trial class!



Gamified Learning



MOE-aligned Curriculum



Personalised Reports

