



Spark Math

Primary 1

Halloween Worksheet



1 Fill in the blank with the correct answer.

 +

18 + 9 = _____

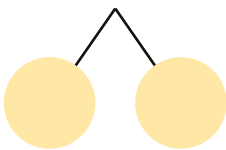
2 Choose the correct answer.

36 = _____ .

- (1) 3 tens 6 ones
- (2) 6 tens 3 ones
- (3) 36 tens 0 ones
- (4) 0 tens 6 ones

3 Fill in each blank with the correct answer.

94 + 3 = _____



4 Write the amount of money in words.

- (1) 1c _____
- (2) \$1 _____
- (3) 5c _____
- (4) \$3 _____
- (5) 10c _____
- (6) \$20 _____
- (7) 20c _____
- (8) \$100 _____

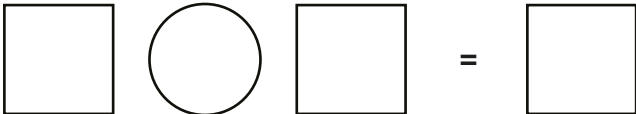


5 Write the amount of money in words.


(1)  \$ _____

(2)  \$ _____

6 Tom has 17 pumpkins.
 Jerry has 9 pumpkins fewer than Tom.
 How many pumpkins does Jerry have?

 Jerry has _____ pumpkins.

7 The clocks below show the time Alex, Ben and Colin went to bed on Halloween night.
 Who went to bed first?

 _____ went to bed first.

Alex Ben Colin

8 

(1) There are _____ bats altogether.

(2) Circle the bats into 2 equal groups.

There are _____ bats in each group.

Scan for a free trial class!



Gamified Learning



MOE-aligned Curriculum



Personalised Reports

