



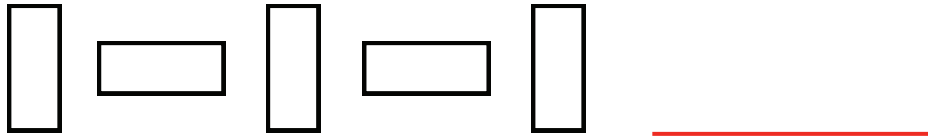
Spark Math

Kindergarten

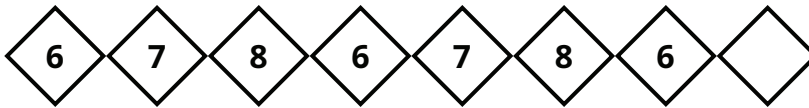
Halloween Worksheet



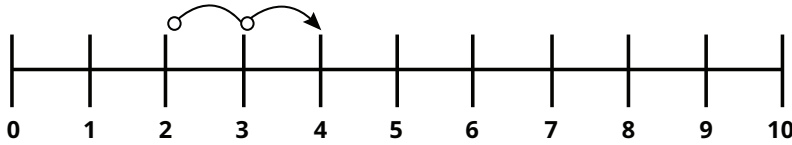
1 Draw the next shape to complete the pattern.



2 Complete the number pattern.



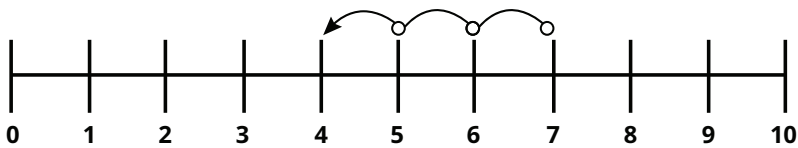
3 Count on. Write the correct answers.



2 more than 2 is _____

$2 + 2 =$ _____



4 Count back. Write the correct answers.



3 less than 7 is _____

$7 - 3 =$ _____

5 There are 10 cookies on each plate. How many cookies are there altogether?
Count and write the answer in each box.



+ =



6 Count and add. Write the answer in each box.



$$\square + \square = \square$$

7 Tick (✓) the correct time shown on each clock.




2 o'clock	<input type="checkbox"/>
3 o'clock	<input type="checkbox"/>
4 o'clock	<input type="checkbox"/>



5 o'clock	<input type="checkbox"/>
6 o'clock	<input type="checkbox"/>
7 o'clock	<input type="checkbox"/>

8 Solve the word problem below.



$$\square + \square$$

Benny has 3 pieces of candy. He bought 4 more pieces.
 How many pieces of candy does Benny have altogether?
 Benny has _____ pieces of candy altogether.

Scan for a free trial class!



Gamified Learning



MOE-aligned Curriculum



Personalised Reports

