




# 2nd Grade Halloween Worksheet



For the answer key, go to  
[blog.sparkedu.com/halloween-worksheets](http://blog.sparkedu.com/halloween-worksheets)

1 How many pieces of  are there?



Tens	Ones

$$\square + \square = \square$$

There are \_\_\_\_\_ pieces of .

2 Compare the numbers.

(a) Compare 59 and 71.

Tens	Ones	Tens	Ones
5	9	7	1

is greater than .

(b) Compare 85 and 87.

Tens	Ones	Tens	Ones
8	5	8	7

is greater than .

3 What is the missing sign in the box?

$$7 \times 5 = 5 \times 5 \quad \square \quad 2 \times 5$$

(1) +    (2) -    (3) ×    (4) ÷

4 Which two cards below have the same value?

$12 \div 3$
-------------

A

4 groups of 3
------------------

B

$2 \times 3$
--------------

C

4 threes
----------

D


(1) B and D    (2) B and C  
(3) A and C    (4) A and D



**5** Which of the following has a value smaller than 5?

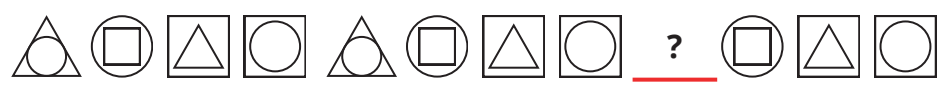
- (1)  $14 \div 2$       (2)  $20 \div 5$       (3)  $24 \div 4$       (4)  $30 \div 3$

**6** Look at the picture below. The pumpkin weighs 300 g. What is the mass of the apple?



- (1) 106 g  
(2) 160 g  
(3) 406 g  
(4) 460 g

**7** Study the pattern below. What is the missing figure?



- (1)       (2)       (3)       (4) 

**8** What is the amount of money shown below?



- (1) \$2.70      (2) \$2.80      (3) \$3.20      (4) \$3.50



Gamified Learning



Research Proven Curriculum



Personalized Progress Reports



Try a FREE class